

NOM

1. Calcula:

$500 + 300 = \dots\dots\dots$

$700 - 400 = \dots\dots\dots$

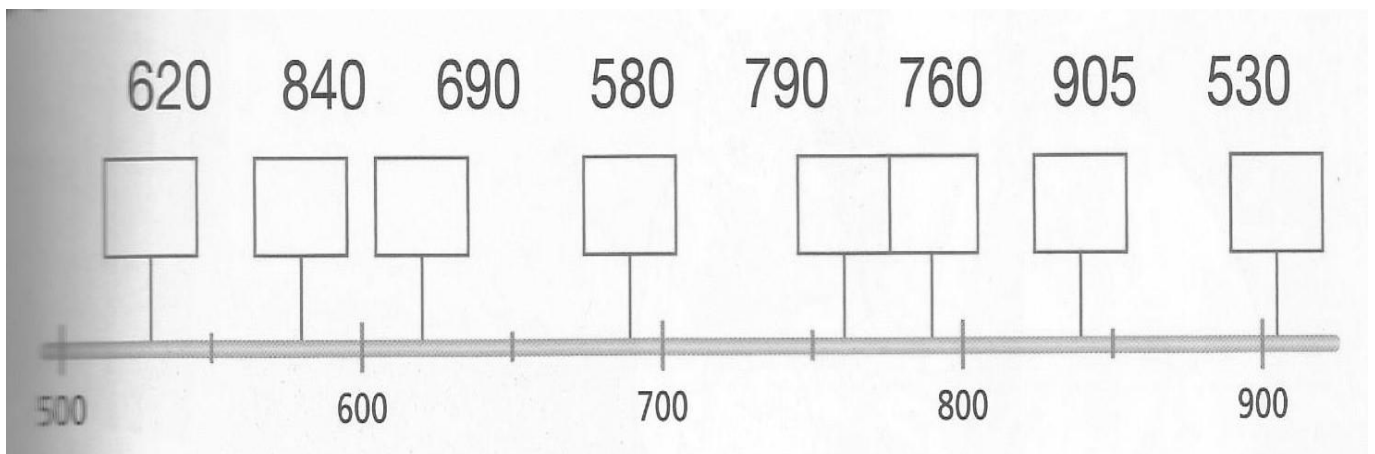
$300 + 600 = \dots\dots\dots$

$600 - 500 = \dots\dots\dots$

$600 + 200 = \dots\dots\dots$


$900 - 200 = \dots\dots\dots$

2. Col·loca cada nombre al seu lloc.




3. Ordena de més gran a més petit

4. Completa les sumes i les multiplicacions:




$$\dots + \dots = \dots$$

$$2 \times \dots = \dots$$




$$\dots + \dots = \dots$$

$$\dots \times \dots = \dots$$



$$\dots + \dots = \dots$$

$$\dots \times \dots = \dots$$



$$\dots + \dots = \dots$$

$$\dots \times \dots = \dots$$



$$\dots + \dots + \dots = \dots$$

$$\dots \times \dots = \dots$$



$$\dots + \dots + \dots = \dots$$

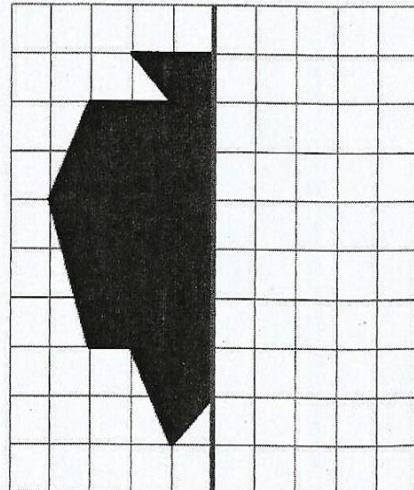
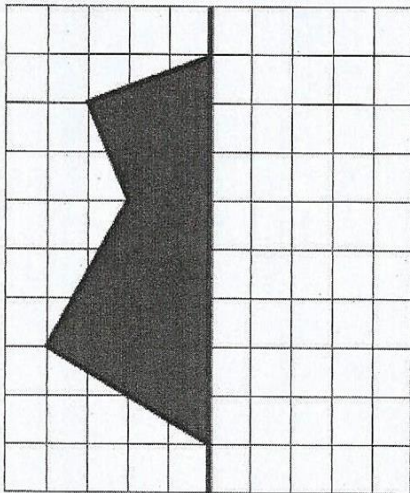
$$\dots \times \dots = \dots$$

5. Encercla les dates següents:


- El segon dimarts d'agost.
- L'últim diumenge de juliol.
- La primera setmana de juliol.
- El quart dimarts d'agost.

JULIOL							AGOST						
dl	dt	dc	dj	dv	ds	dg	dl	dt	dc	dj	dv	ds	dg
			1	2	3	4	5				1	2	
6	7	8	9	10	11	12	3	4	5	6	7	8	9
13	14	15	16	17	18	19	10	11	12	13	14	15	16
20	21	22	23	24	25	26	17	18	19	20	21	22	23
27	28	29	30	31			24	25	26	27	28	29	30


6. Completa les figures següents




7. Encercla els objectes que són simètrics.




8. Escriu el nom de cada figura.




.....



.....

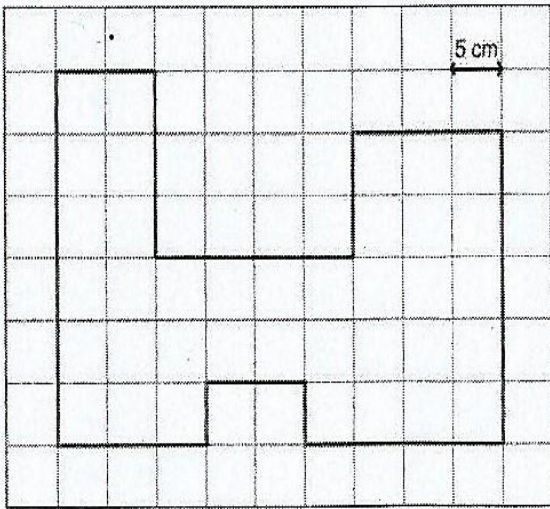


.....



.....

9. Pinta la figura al teu gust i calcula el seu perímetre.



..... centímetres