





























NOM:

1. Observa els colors dels estels i fes les restes:

<div style="display: flex; flex-direction: column; align-items: center;"> <div style="border-left: 1px solid black; height: 100px; margin-right: 5px;"></div> <div style="margin-left: 5px;">        </div> </div>	➔	82	-		-		-		-		-		-	
	➔	64	-		-		-		-		-		-	
	➔	45	-		-		-		-		-		-	
	➔	37	-		-		-		-		-		-	

2. Calcula aquestes sumes.

$$\begin{array}{r} 47 \\ + 37 \\ \hline \end{array}$$

$$\begin{array}{r} 52 \\ + 29 \\ \hline \end{array}$$

$$\begin{array}{r} 64 \\ + 6 \\ \hline \end{array}$$

$$\begin{array}{r} 38 \\ + 17 \\ \hline \end{array}$$

$$\begin{array}{r} 29 \\ + 31 \\ \hline \end{array}$$

$$\begin{array}{r} 25 \\ + 45 \\ \hline \end{array}$$

$$\begin{array}{r} 19 \\ + 62 \\ \hline \end{array}$$

$$\begin{array}{r} 18 \\ + 18 \\ \hline \end{array}$$

$$\begin{array}{r} 24 \\ + 39 \\ \hline \end{array}$$

$$\begin{array}{r} 43 \\ + 27 \\ \hline \end{array}$$

$$\begin{array}{r} 35 \\ 22 \\ + 24 \\ \hline \end{array}$$

$$\begin{array}{r} 17 \\ 22 \\ + 31 \\ \hline \end{array}$$

$$\begin{array}{r} 47 \\ 8 \\ + 23 \\ \hline \end{array}$$

$$\begin{array}{r} 35 \\ 20 \\ + 15 \\ \hline \end{array}$$

$$\begin{array}{r} 16 \\ 36 \\ + 35 \\ \hline \end{array}$$

.....

.....

.....

.....

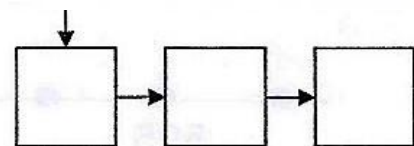
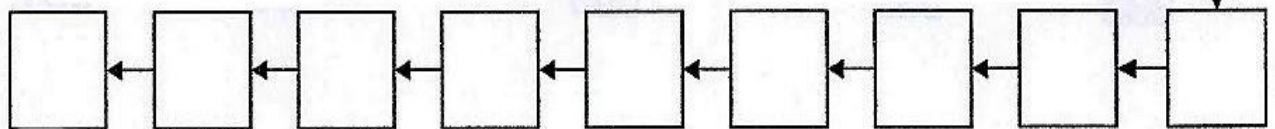
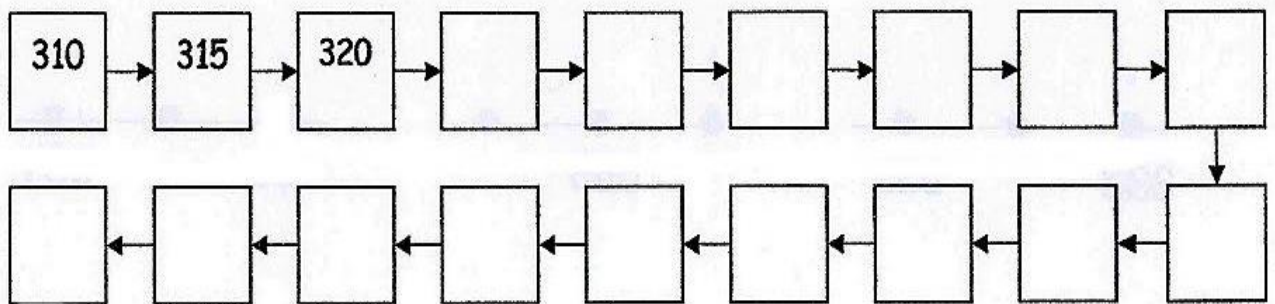
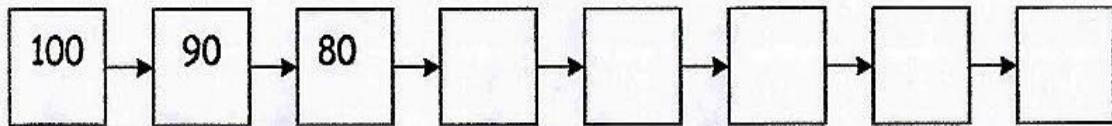
.....

- Inventa un problema on facis servir la taula de multiplicar del 2 i la taula del 3.



4. Completa les sèries:

SÈRIES



5. Mesura diferents objectes o elements (grans i petits) que tinguis per casa o en teu entorn i escriu el que mesuren en centímetres ( cm ) o metres ( m ) segons correspongui.