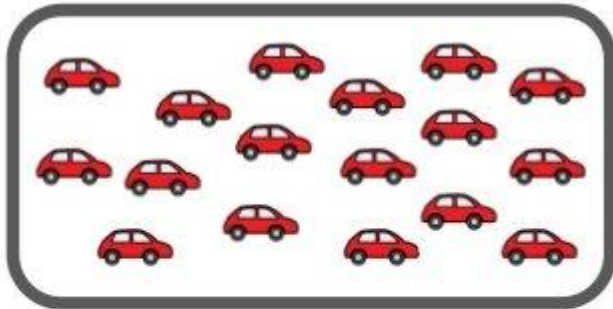


Nom:


1. Encercla les desenes i completa.



D	U

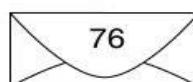
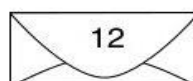
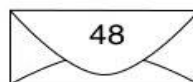
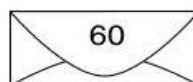
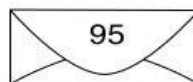
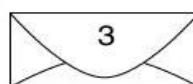


D	U



D	U

2. Relaciona.







3. Completa les sèries.

45	48								
----	----	--	--	--	--	--	--	--	--

31	29								
----	----	--	--	--	--	--	--	--	--

4. Encercla la desena que s'acosti més al preu:

 <p>80 90 87 euros</p>	 <p>40 50 49 euros</p>	 <p>20 30 21 euros</p>	 <p>70 80 73 euros</p>
--	---	---	---

5. Escriu el nombre anterior i posterior.

	16	
	98	
	45	
	60	

	79	
	23	
	81	
	9	

6. Completa.

1r _____	--- Desè
4t _____	11è _____
___ Cinquè	___ Divuitè
7è _____	___ Vintè
2n _____	17è _____
___ Sisè	___ Novè
3r _____	___ Qinzè
___ Vuitè	13è _____

7. Calcula.

$$\begin{array}{r} 54 \\ + 41 \\ \hline \end{array}$$

$$\begin{array}{r} 30 \\ + 50 \\ \hline \end{array}$$

$$\begin{array}{r} 25 \\ + 23 \\ \hline \end{array}$$

$$\begin{array}{r} 43 \\ + 52 \\ \hline \end{array}$$

$$\begin{array}{r} 80 \\ + 30 \\ \hline \end{array}$$

$$\begin{array}{r} 44 \\ - 12 \\ \hline \end{array}$$

$$\begin{array}{r} 56 \\ - 41 \\ \hline \end{array}$$

$$\begin{array}{r} 90 \\ - 60 \\ \hline \end{array}$$

$$\begin{array}{r} 75 \\ - 22 \\ \hline \end{array}$$

$$\begin{array}{r} 89 \\ - 38 \\ \hline \end{array}$$

$$\begin{array}{r} 35 \\ 22 \\ + 23 \\ \hline \end{array}$$

$$\begin{array}{r} 16 \\ + 41 \\ 31 \\ \hline \end{array}$$

$$\begin{array}{r} 47 \\ + 11 \\ 31 \\ \hline \end{array}$$

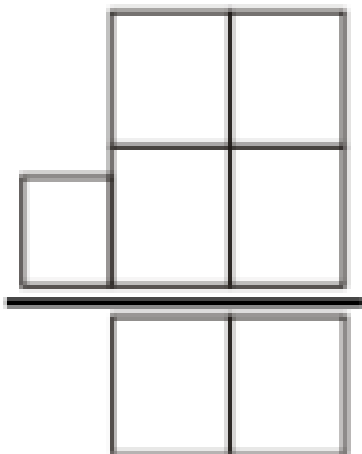
$$\begin{array}{r} 82 \\ + 32 \\ 23 \\ \hline \end{array}$$

$$\begin{array}{r} 8 \\ + 4 \\ 2 \\ \hline \end{array}$$

8. Tria l'operació i resol.


- En Daniel té 34 cromos i la Marta en té 25. quants cromos tenen entre tots 2?

Solució:



- La Gemma té 48 globus. Si en regala 23, quants li queden?

Solució:



- Inventa un problema on facis servir els conceptes de **doble i triple**.

Solució: