

MATEMÀTIQUES 6è CICLE SUPERIOR

Activitats

Nom :





Grup :

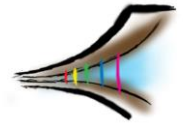
Data :

SETMANA DEL 25 AL 29 DE MAIG

Exercici número 1

Digueu el nombre de cares, arestes i vèrtexs que té cada una d'aquestes figures:

	
<p>Cares: Arestes: Vèrtexs:</p>	<p>Cares: Arestes: Vèrtexs:</p>
	
<p>Cares: Arestes: Vèrtexs:</p>	<p>Cares: Arestes: Vèrtexs:</p>




Exercici número 2

Dibuixa cada una de les cares que tenen aquestes figures:



--	--	--	--	--



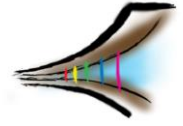
--	--	--	--



--	--	--

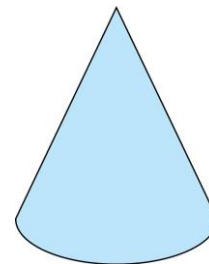
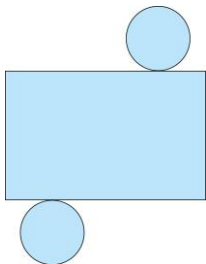
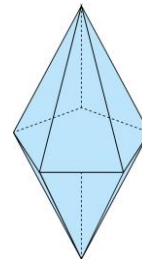
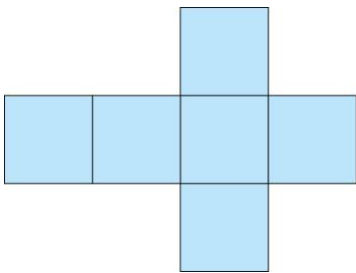
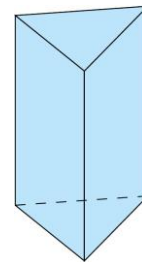
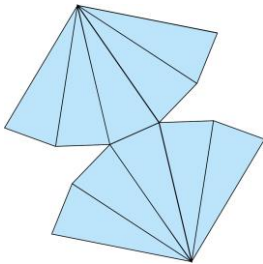
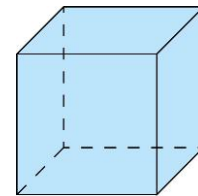
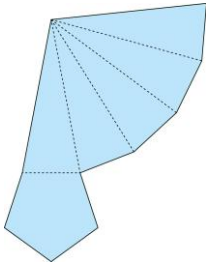
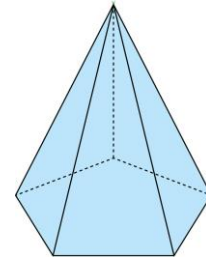
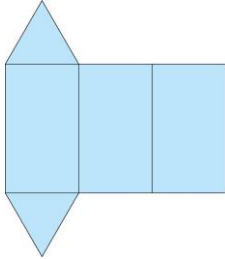


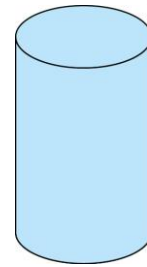
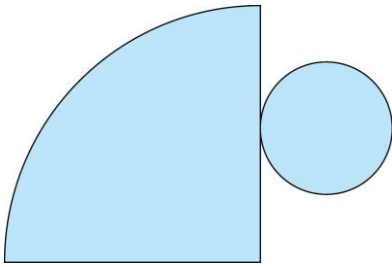
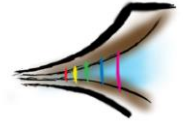
--	--	--	--	--	--



Exercici número 3

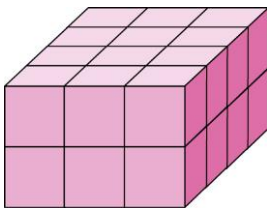
Relaciona cada desplegament amb la figura que li correspon:





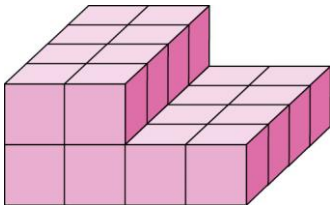
Exercici número 4

Calcula el volum que ocupa aquest prisma.



Exercici número 5

Podries dir quants cubs formen aquesta figura?



Exercici número 6

Si em miro la figura de l'exercici anterior des d'on indica la fletxa, quina imatge veuré? Encercla-la.

