

Nom: \_\_\_\_\_

Data: \_\_\_\_\_

### 1a sessió d'àbac amb centenes

1. Fes les següents sumes amb l'àbac.

$152 + 320 = \boxed{\phantom{000}}$

$214 + 542 = \boxed{\phantom{000}}$

$333 + 165 = \boxed{\phantom{000}}$

$408 + 500 = \boxed{\phantom{000}}$

$173 + 303 = \boxed{\phantom{000}}$

$522 + 245 = \boxed{\phantom{000}}$

$326 + 661 = \boxed{\phantom{000}}$

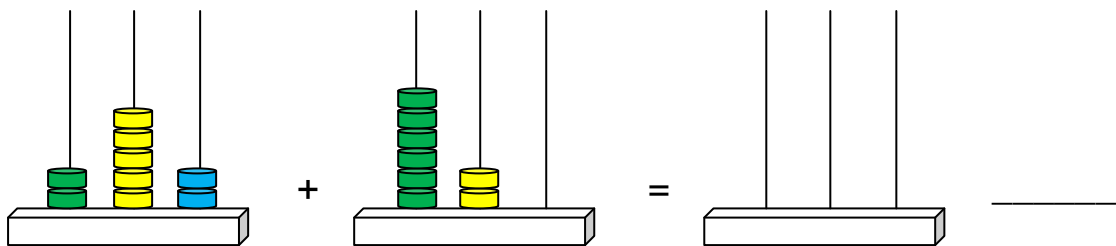
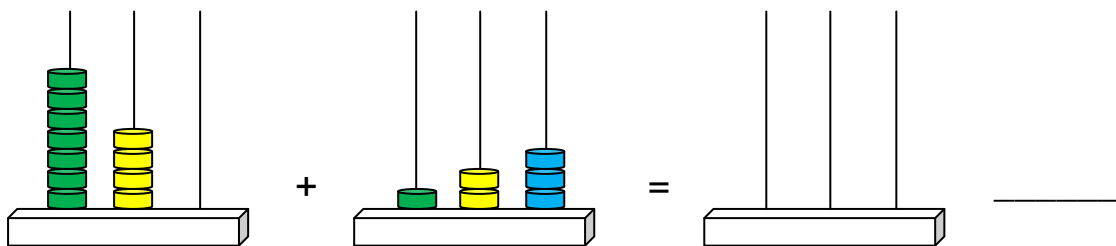
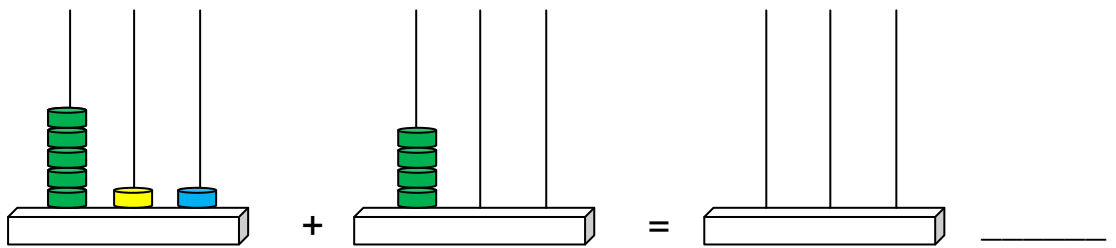
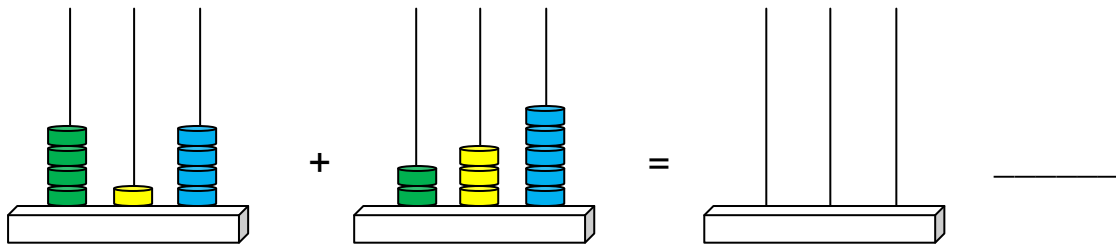
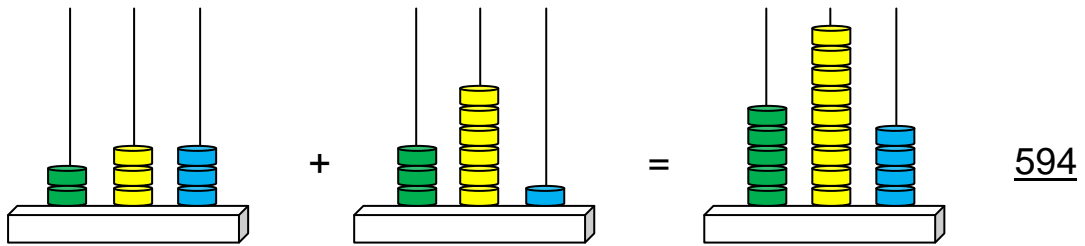
$254 + 740 = \boxed{\phantom{000}}$

$114 + 805 = \boxed{\phantom{000}}$

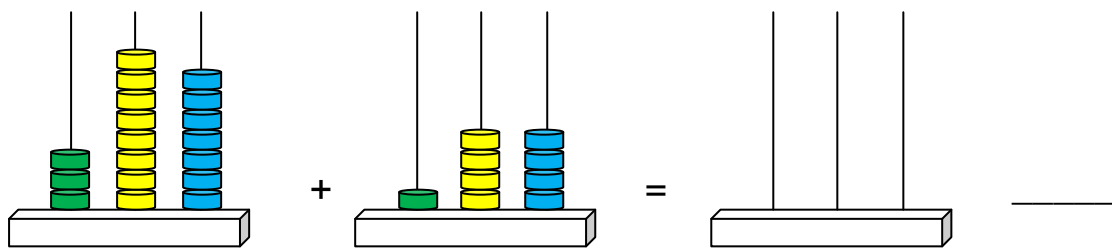
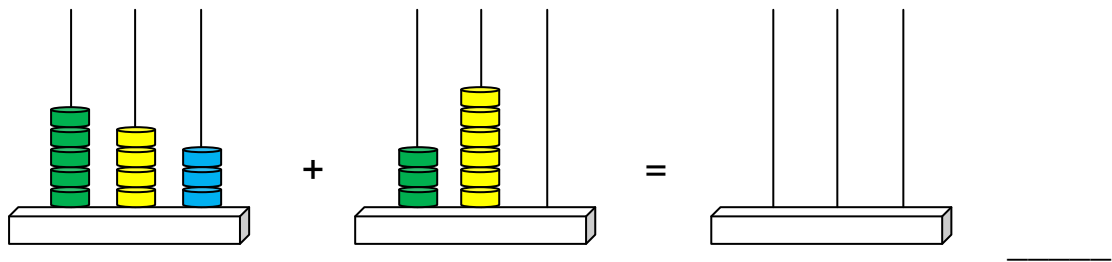
$207 + 400 = \boxed{\phantom{000}}$

2. Fes aquestes sumes i dibuixa el resultat a l'àbac o escriu el resultat amb números a la ratlla.

EXEMPLE:



3. Fes aquestes dues sumes.



Explica quines dificultats has tingut a l'exercici 3 i com ho has solucionat.

---

---

---

---

---

---

---