


MATEMÀTIQUES


CÀLCUL (2)

1. Col·loca les multiplicacions en vertical i fes-les.

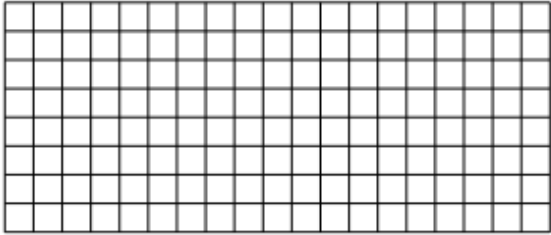
$$865 \times 150$$



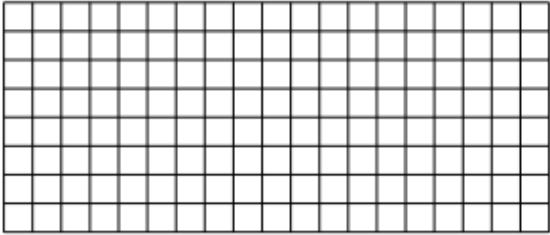
$$754 \times 230$$



$$564 \times 307$$




$$683 \times 406$$




2. Col·loca bé les divisions i les resols.

$$1.836 : 9$$



$$4.024 : 8$$



3. Divideix.

$$85 \overline{) 25}$$

$$78 \overline{) 15}$$

$$94 \overline{) 14}$$