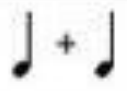

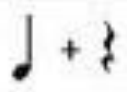
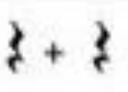








MÚSICA

1. Quants temps sumen aquests patrons rítmics?

1.  = <input type="text"/>	6.  = <input type="text"/>
2.  = <input type="text"/>	7.  = <input type="text"/>
3.  = <input type="text"/>	8.  = <input type="text"/>
4.  = <input type="text"/>	9.  = <input type="text"/>
5.  = <input type="text"/>	10.  = <input type="text"/>

2. Crea patrons rítmics que sumin el que et demana en cada cas:

a) = 8

b) = 6

c) = 10

d) = 4