

1. Fes les següents operacions:

1.
$$\begin{array}{r} 801 \\ \times 6 \\ \hline \end{array}$$

2.
$$\begin{array}{r} 766 \\ \times 5 \\ \hline \end{array}$$

3.
$$\begin{array}{r} 772 \\ \times 7 \\ \hline \end{array}$$

4.
$$\begin{array}{r} 426 \\ \times 8 \\ \hline \end{array}$$

5.
$$\begin{array}{r} 193 \\ \times 2 \\ \hline \end{array}$$

6.
$$\begin{array}{r} 622 \\ \times 8 \\ \hline \end{array}$$

7.
$$\begin{array}{r} 228 \\ \times 3 \\ \hline \end{array}$$

8.
$$\begin{array}{r} 324 \\ \times 8 \\ \hline \end{array}$$

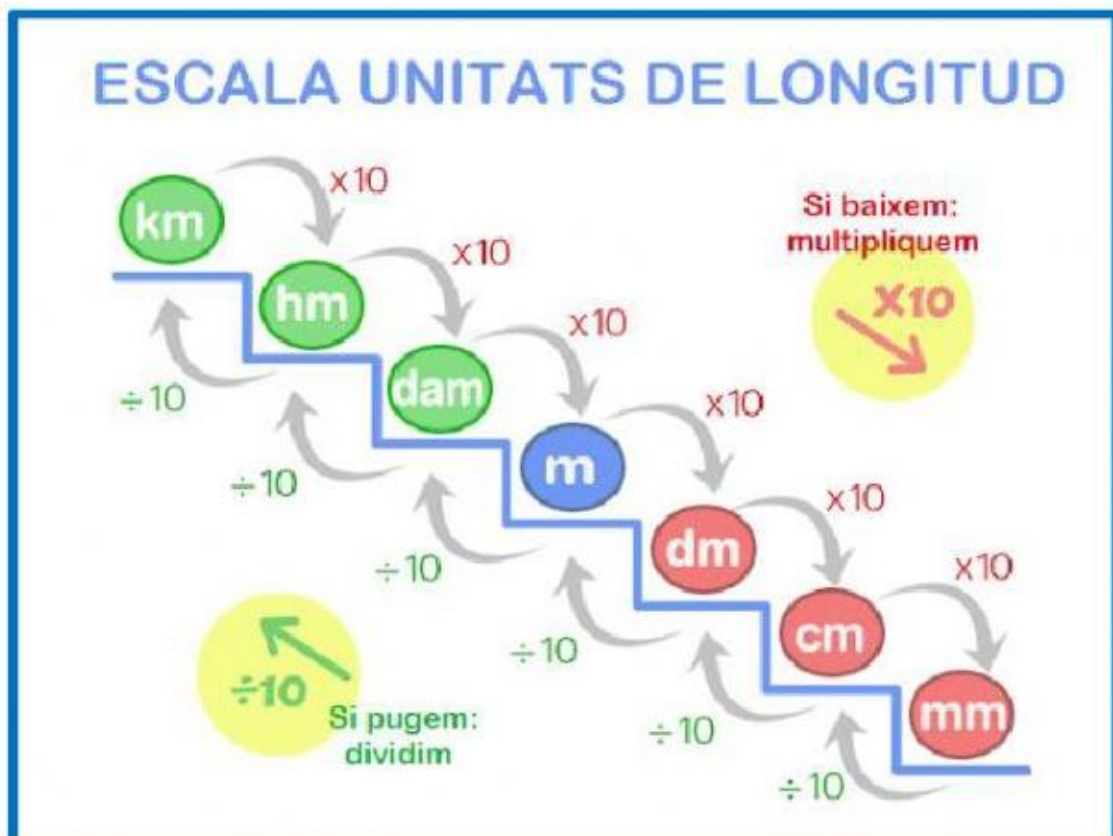
9.
$$\begin{array}{r} 138 \\ \times 2 \\ \hline \end{array}$$

10.
$$\begin{array}{r} 597 \\ \times 7 \\ \hline \end{array}$$

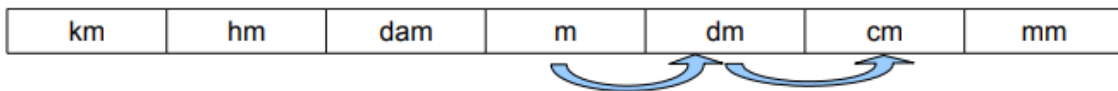
11.
$$\begin{array}{r} 465 \\ \times 7 \\ \hline \end{array}$$

12.
$$\begin{array}{r} 455 \\ \times 7 \\ \hline \end{array}$$

2. Fes els següents canvis d'unitats seguint l'escala d'unitats de longitud.

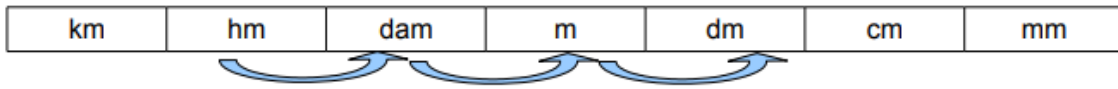


a) Per passar de **m** a **cm** hem fet botes.



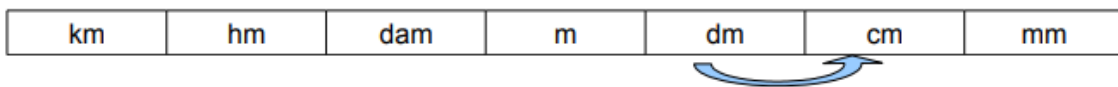
• **3 m = cm**

b) Per passar d'**hm** a **dm** hem fet botes.



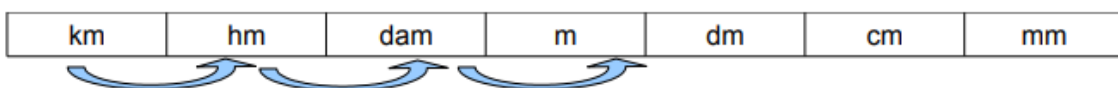
• **4 hm = dm**

c) Per passar de **dm** a **cm** hem fet botes.



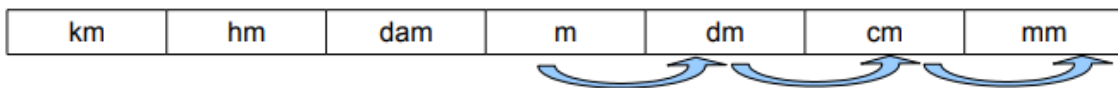
• **56 dm = cm**

d) Per passar de **km** a **m** hem fet botes.



• **9 km = m**

e) Per passar de **m** a **mm** hem fet botes.



• **96 m = mm**