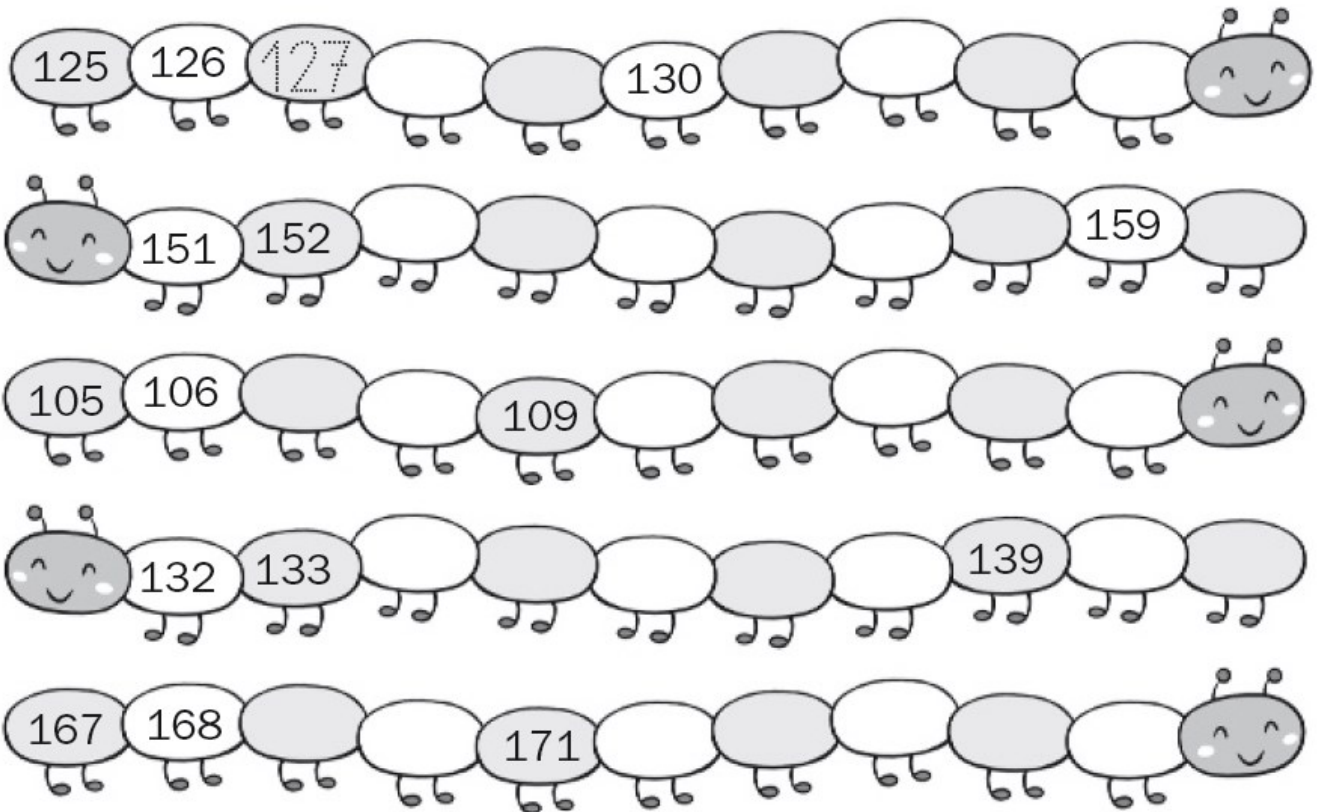


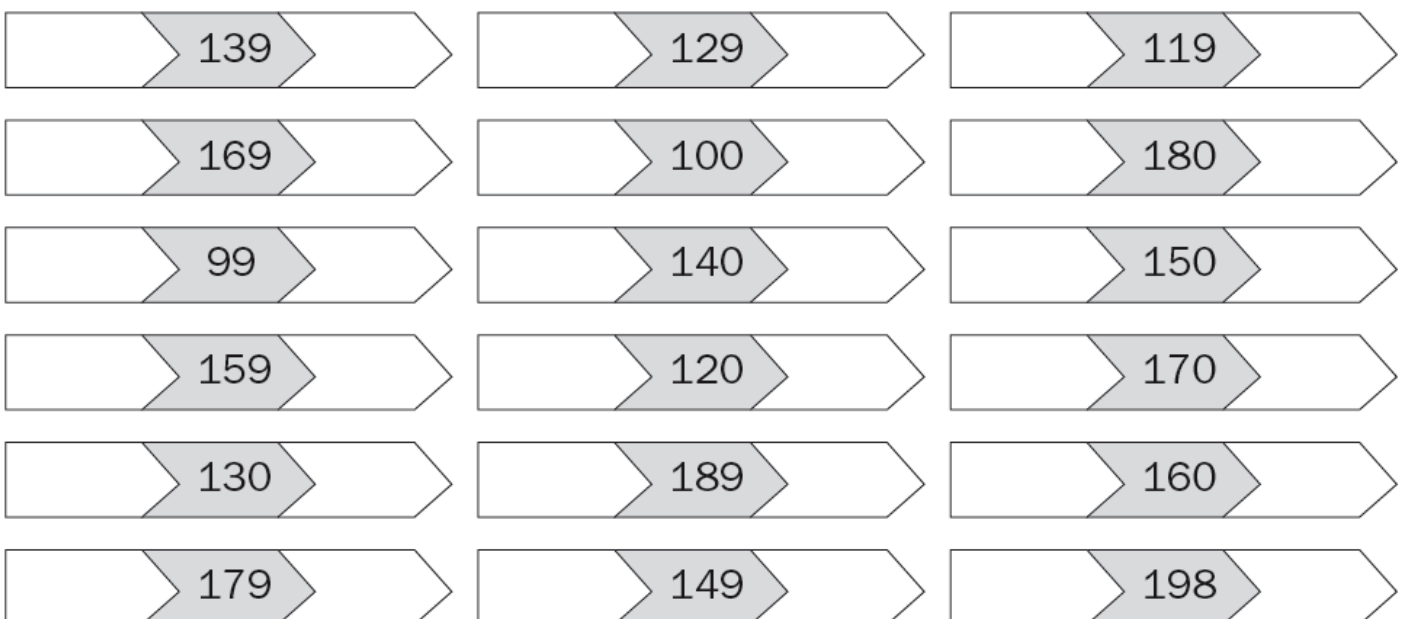


MATEMÀTIQUES

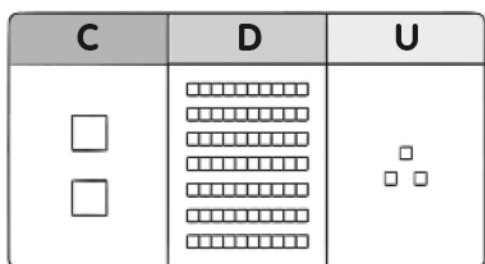
1.-Completa les sèries



2.- Escribe el nombre anterior i posterior als següents

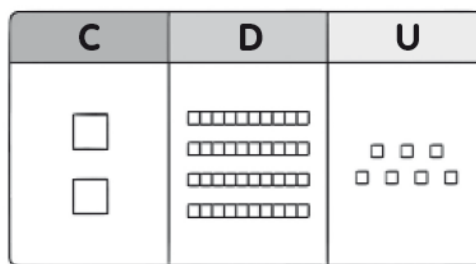


3.- Completa les descomposicions



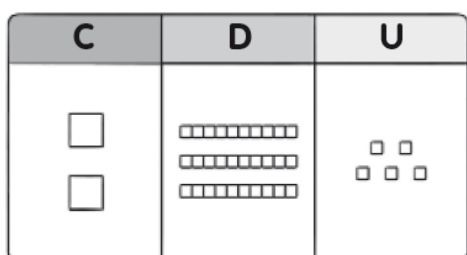
$$2 \text{ C} + 7 \text{ D} + 3 \text{ U}$$

$$200 + 70 + 3 = 273$$



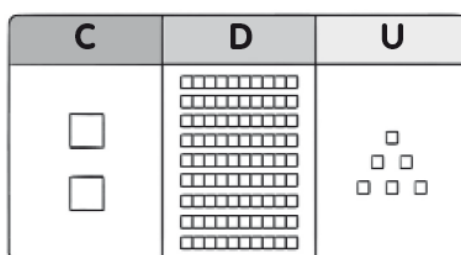
$$\square \text{ C} + \square \text{ D} + \square \text{ U}$$

$$\square + \square + \square = \square$$



$$\square \text{ C} + \square \text{ D} + \square \text{ U}$$

$$\square + \square + \square = \square$$

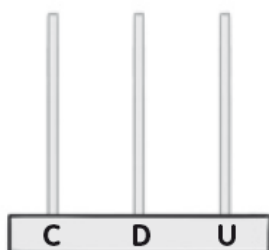


$$\square \text{ C} + \square \text{ D} + \square \text{ U}$$

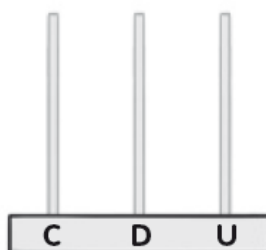
$$\square + \square + \square = \square$$

4.- Representa cada nombre a l'àbac

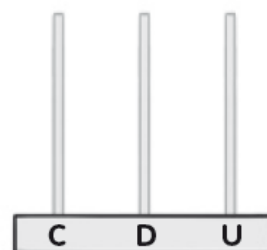
265



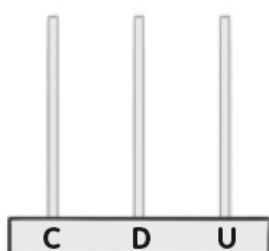
236



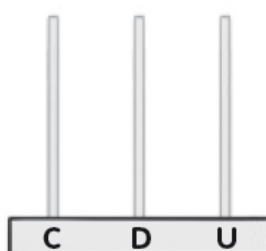
274



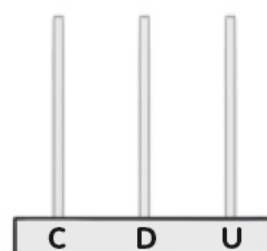
290



281



201



SUMES I RESTES

Mira abans aquest enllaços que et poden ajudar



<https://www.youtube.com/watch?v=OxGdm3lui1U>

<https://www.youtube.com/watch?v=bZR4QcxEJbs&t=27s>

$$\begin{array}{r} + 068 \\ + 286 \\ \hline \end{array}$$

$$\begin{array}{r} - 971 \\ - 228 \\ \hline \end{array}$$

$$\begin{array}{r} + 719 \\ + 615 \\ \hline \end{array}$$

$$\begin{array}{r} - 512 \\ - 155 \\ \hline \end{array}$$

$$\begin{array}{r} + 159 \\ + 299 \\ \hline \end{array}$$

$$\begin{array}{r} - 542 \\ - 277 \\ \hline \end{array}$$

$$\begin{array}{r} + 708 \\ + 807 \\ \hline \end{array}$$

$$\begin{array}{r} - 811 \\ - 389 \\ \hline \end{array}$$

$$\begin{array}{r} + 529 \\ + 747 \\ \hline \end{array}$$

$$\begin{array}{r} - 949 \\ - 91 \\ \hline \end{array}$$

$$\begin{array}{r} + 984 \\ + 783 \\ \hline \end{array}$$

$$\begin{array}{r} - 826 \\ - 392 \\ \hline \end{array}$$