

VINE A CALCULAR AMB MI



FEINES EXTRES
PER A QUI EN VOL
MÉS...



RECORDEU!!!



Escola La Cabana

QUINES
ACTIVITATS
PODEM FER???



MMM...
APP BMATH
FER EXPERIMENTS (DIJOUS A
LES 18H)
MIRAR LA WEB DE L'ESCOLA




ENVIEU UNA
FOTO SETMANAL

NOM:

DATA:



QUANTES FLORS HI HA?





NOM:

DATA:





QUANTS ANIMALS HI HA?



+

=



+

=

QUANTES VAQUES HI HA? _____

QUANTS GALLS HI HA? _____

NOM:

DATA:





QUANTS ANIMALS HI HA?



+

=



+

=

QUANTES VAQUES HI HA? _____

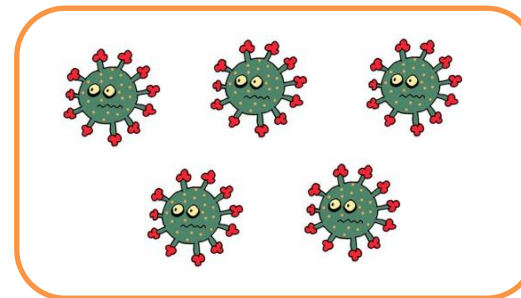
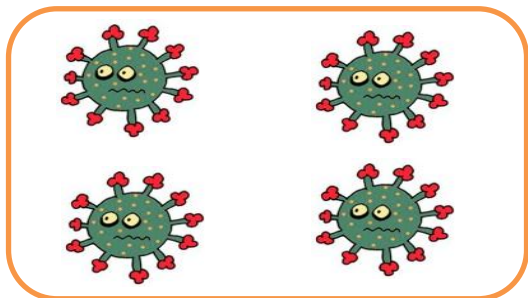
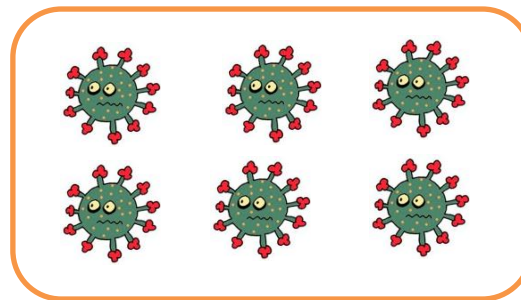



QUANTS GALLS HI HA? _____

NOM:

DATA:



QUANTS CORONAVIRUS HI HA ?



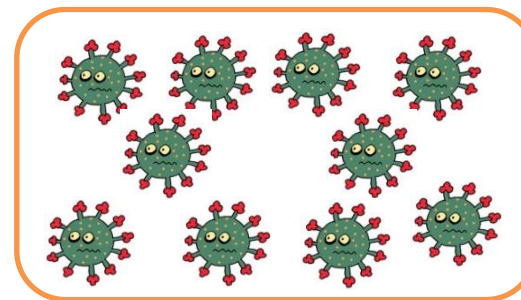
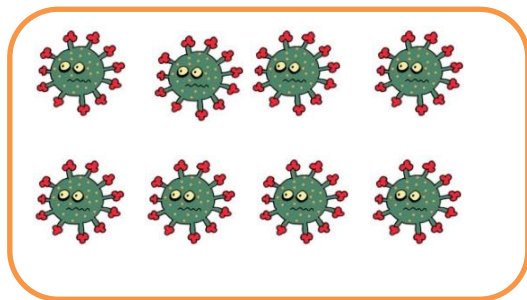
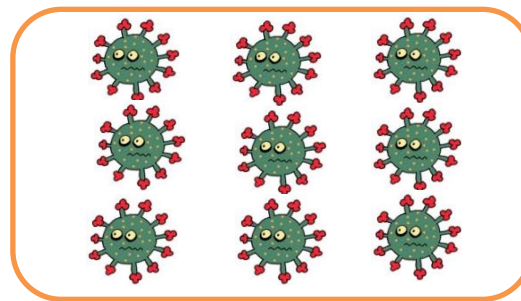
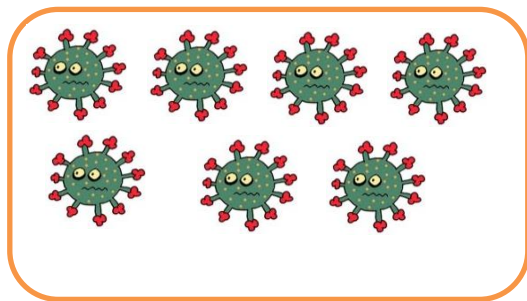
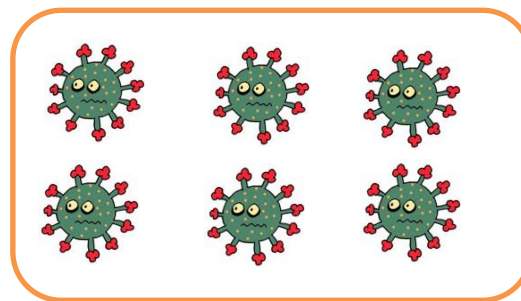
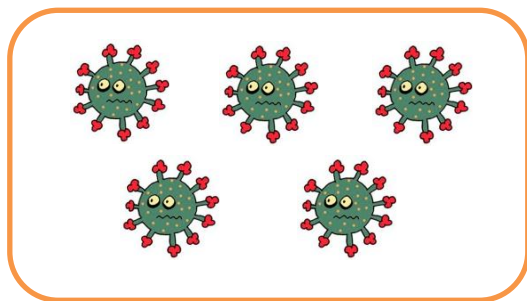
NOM:

DATA:



Escola La Cabana

QUANTS CORONAVIRUS HI HA ?



NOM:

DATA:



TROBA ELS NÚMEROS I ENCERCLALS AMB EL COLOR CORRESPONENT:

1-VERMELL - 2-BLAU - 3-VERD - 4-TARONJA - 5-LILA.

1 2 1 3 1 3
5 3 5 4 2
2 2 4 2 3

NOM:

DATA:



ENCERCLA AMB GRUPS DE 5:



QUANTES PAPALLONES HAN QUEDAT FORA?

HAN QUEDAT FORA _____ PAPALLONES.



QUANTES MARIETES HAN QUEDAT FORA?


HAN _____.

NOM:

DATA:




ENCERCLA AMB GRUPS DE 10:



QUANTES PAPALLONES HAN QUEDAT FORA?

HAN QUEDAT FORA _____ PAPALLONES.



QUANTES MARIETES HAN QUEDAT FORA?


HAN _____.

NOM:


DATA:




COMPLETA ELS CONJUNTS DIBUIXANT ELS OBJECTES QUE FALTEN:




3




2



5



4



1




6

NOM:

DATA:




COMPLETA ELS CONJUNTS DIBUIXANT ELS OBJECTES QUE FALTEN:



6



9



8



10



7



0

FINS AQUÍ LES TASQUES. ESPEREM QUE
GAUDIU MOLT DE LES MATES!!!

