
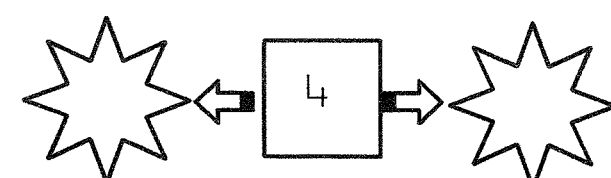
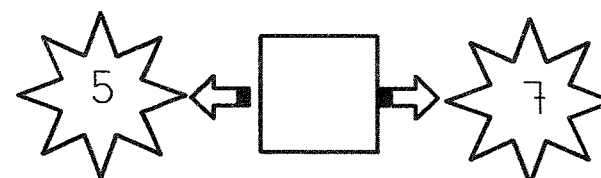
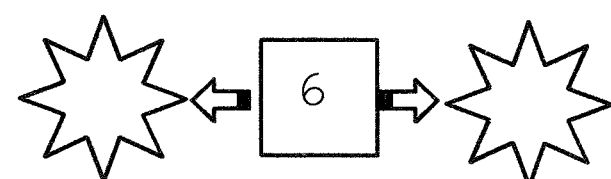
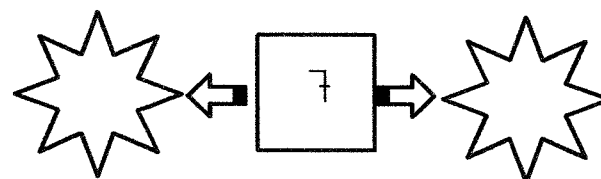
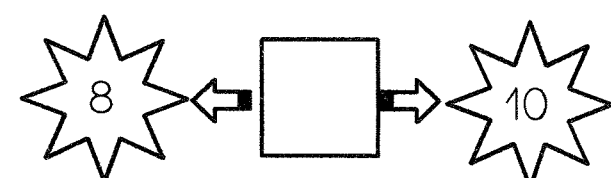
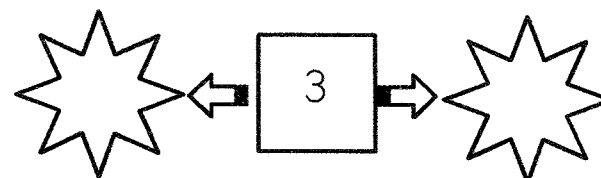
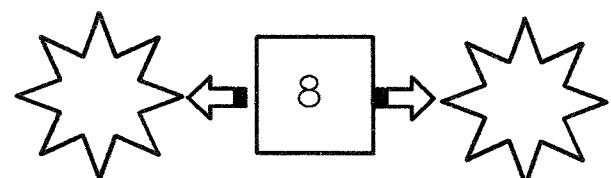
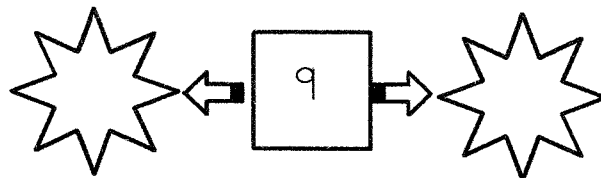
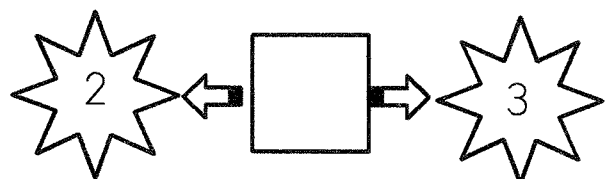
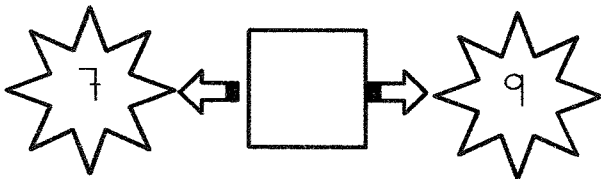
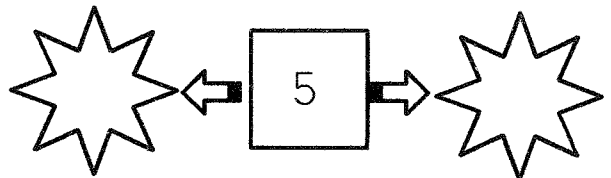
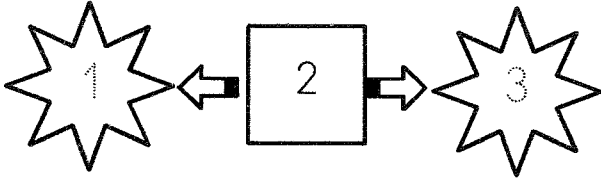


# ELS NOMBRES



POSA L'ANTERIOR I EL POSTERIOR DE CADA NOMBRE:



Nom: ..... Data: .....



# Números fins el 19



FITXA 12

Relaciona cada número amb el seu dibuix.

10

11

12

13

14

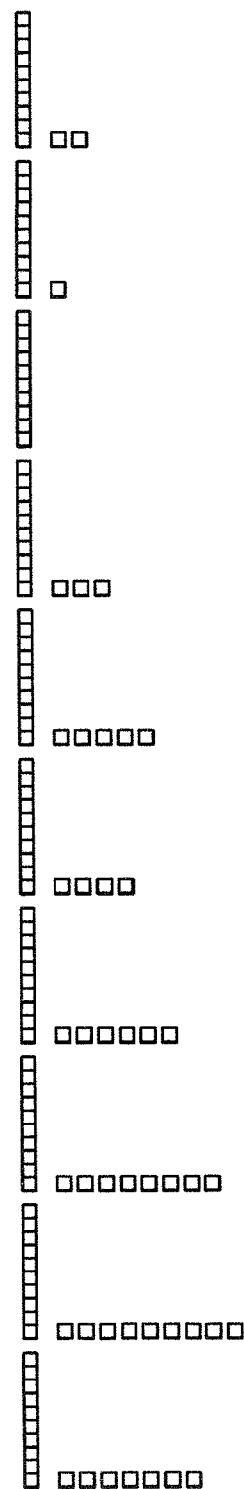
15

16

17

18

19



Nom: .....



Data: .....



# Sumes

FITXA 5

Resol les sumes dibuixant rodones al costat.

2	○ ○
5	○ ○ ○ ○ ○
+ 1	○
<hr/>	
8	

$$\begin{array}{r} 2 \\ 3 \\ + 1 \\ \hline \end{array}$$

$$\begin{array}{r} 8 \\ 0 \\ + 1 \\ \hline \end{array}$$

$$\begin{array}{r} 4 \\ 2 \\ + 2 \\ \hline \end{array}$$

$$\begin{array}{r} 5 \\ 2 \\ + 2 \\ \hline \end{array}$$

$$\begin{array}{r} 1 \\ 2 \\ + 5 \\ \hline \end{array}$$

$$\begin{array}{r} 1 \\ 3 \\ + 2 \\ \hline \end{array}$$

Nom: .....




Data: .....



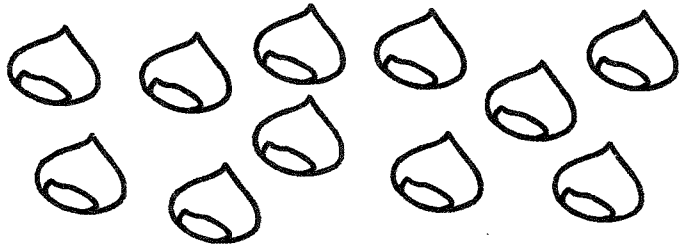
# Números fins el 19

FITXA 1


Encercla grups de 10.




Han quedat fora  
..... bolets.



Han quedat fora  
..... castanyes.









Han quedat fora  
..... pomes.









Han quedat fora  
..... aqlans.

# ELS NOMBRES



5 	4 	3 
+ 1 	+ 2 	+ 4 
<hr/>	<hr/>	<hr/>

6

5 	3 	4 
+ 3 	+ 2 	+ 1 
<hr/>	<hr/>	<hr/>

2	6	8	7	5	6
+ 7	+ 2	+ 0	+ 2	+ 1	+ 3
<hr/>	<hr/>	<hr/>	<hr/>	<hr/>	<hr/>

5	4	9	2	3	6
+ 2	+ 3	+ 1	+ 4	+ 1	+ 1
<hr/>	<hr/>	<hr/>	<hr/>	<hr/>	<hr/>

1	3	1	3	8	7
+ 4	+ 3	+ 1	+ 1	+ 2	+ 0
<hr/>	<hr/>	<hr/>	<hr/>	<hr/>	<hr/>

5	2	7	8	6	5
+ 4	+ 4	+ 3	+ 1	+ 3	+ 5
<hr/>	<hr/>	<hr/>	<hr/>	<hr/>	<hr/>