

$$16 + 4 = 20$$

$$19 + \text{orange} = 20$$

$$\text{orange} + 11 = 20$$

$$12 + \text{orange} = 20$$

$$\text{orange} + 13 = 20$$

$$\text{orange} + 12 = 20$$

$$\text{orange} + 14 = 20$$

$$17 + \text{orange} = 20$$

$$\text{orange} + 10 = 20$$

$$\text{orange} + 18 = 20$$

$$\text{orange} + 15 = 20$$

$$14 + \text{orange} = 20$$

$$13 + \text{orange} = 20$$

$$\text{orange} + 17 = 20$$



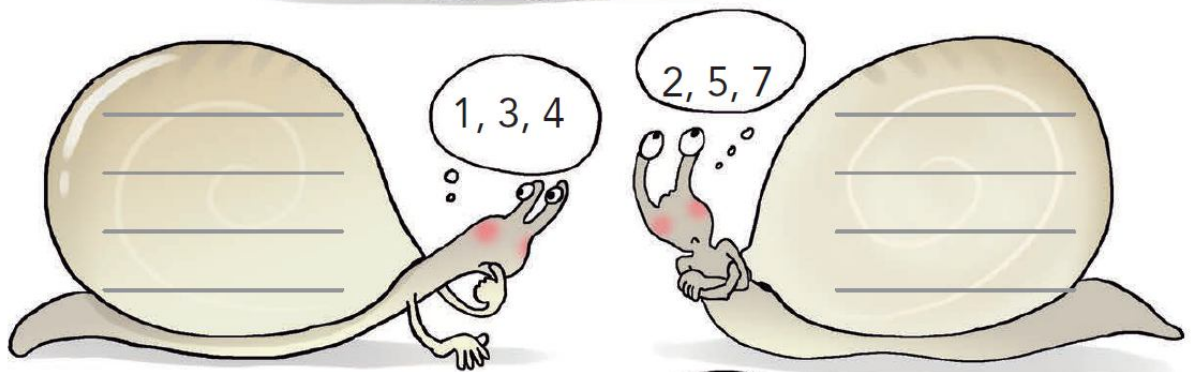
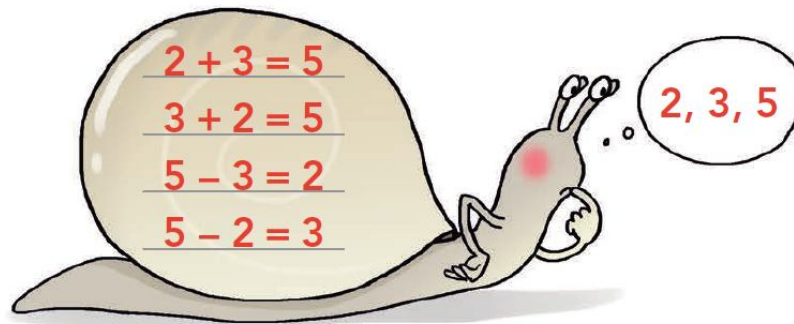
$$\text{orange} + 19 = 20$$

$$\text{orange} + 16 = 20$$



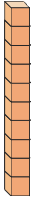
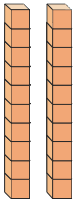
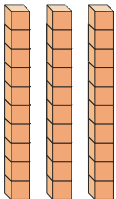
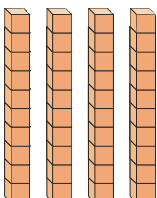
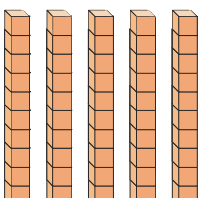
Amb els nombres que hi ha a cada bafarada, has de pensar quines operacions pots fer. Vigila! Només pots utilitzar els 3 nombres que et donen els cargols.

Pista: sempre pots fer dues sumes i dues restes



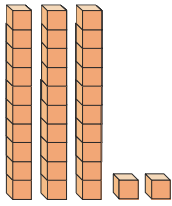
6 1 9 4 2 3 8 5 6 7 3 4 0

4. Compta les desenes i, després, escriu el resultat en xifres i en lletres:

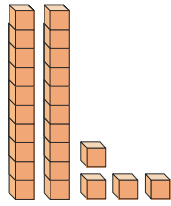
	desenes 1	=	$\frac{D}{U}$ 10	deu
	desenes _____	=	$\frac{D}{U}$ _____	_____
	desenes _____	=	$\frac{D}{U}$ _____	_____
	desenes _____	=	$\frac{D}{U}$ _____	_____
	desenes _____	=	$\frac{D}{U}$ _____	_____

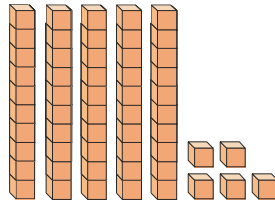
3 2 9 8 0 5 6 3 4 7 9 7 5

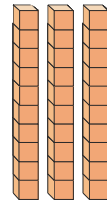
5. Compta les desenes i les unitats i, després, escriu el resultat:

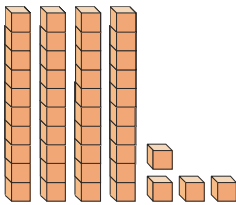


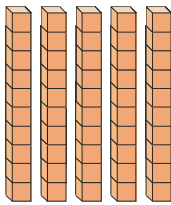
32

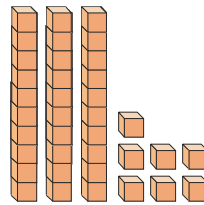


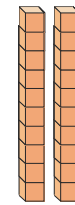


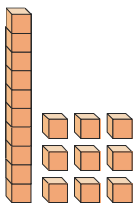


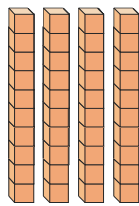


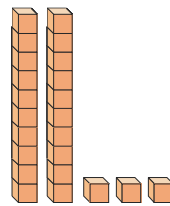


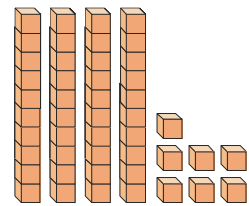














1.- Escribe el número que falta:

ABANS

AL MIG

DESPRÉS

5 6

7 8 9

14 15

ABANS

AL MIG

DESPRÉS

___ 8

___ 17

___ 12

___ 1

___ 20

___ 44

___ 65

1 ___ 3

20 ___ 22

8 ___ 10

14 ___ 16

31 ___ 33

19 ___ 21

11 ___ 13

6 ___

13 ___

29 ___

34 ___

17 ___

42 ___

39 ___

