


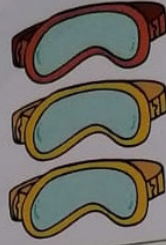
Parts d'un grup d'objectes. (pàgina 124)

Parts d'un grup d'objectes

Amb una fracció podem representar les parts d'un grup d'objectes.




2 gorres verdes
4 gorres en total
Escrivim: $\frac{2}{4}$ de les gorres són verdes.




1 ulleres vermelles
3 ulleres en total
Escrivim: $\frac{1}{3}$ de les ulleres són vermelles.

9 Digues quina fracció correspon a cada grup d'objectes.



a) $\frac{1}{5}$ és morat.

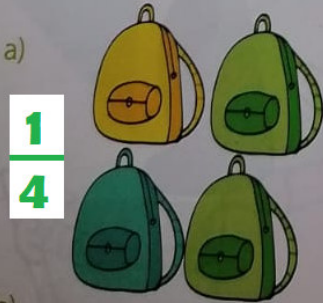


b) $\frac{2}{3}$ són vermells.



c) $\frac{1}{2}$ és blanc.


10 Quines fraccions corresponen als objectes grocs de cada grup?




$\frac{1}{4}$



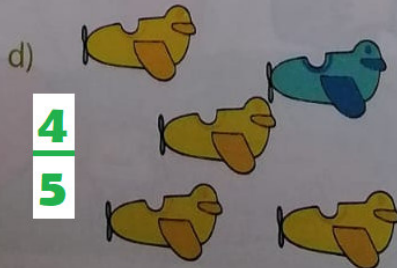
$\frac{2}{2}$




$\frac{3}{4}$



$\frac{3}{5}$




$\frac{4}{5}$





$\frac{1}{3}$

11 Digues quin grup d'objectes de color blau correspon a cada fracció.


$\frac{2}{5}$


a) 


b) 

c) 


$\frac{3}{3}$


a) 


b) 

c) 


$\frac{1}{2}$


a) 

b) 

c) 


$\frac{8}{10}$


a) 

b) 

c) 

$\frac{5}{5}$

a) 

b) 

c) 