

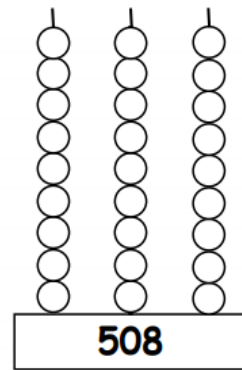


**SETMANA DEL 30 DE
MARÇ AL 5 D'ABRIL**

MATEMÀTIQUES

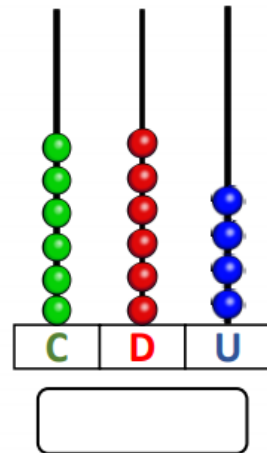
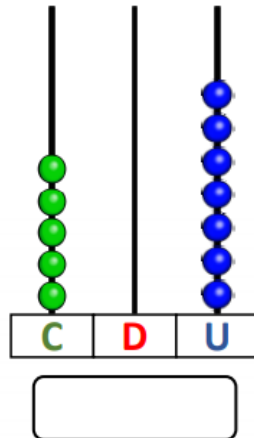
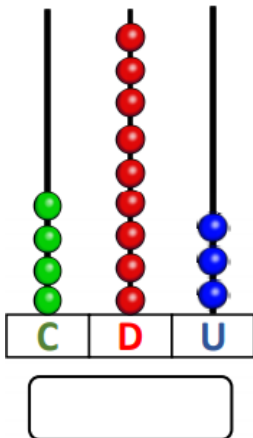
Nom: Data:

Pinta l'àbac de forma que representi el número del requadre de sota:

CENTENES - **DESENES** - **UNITATS**



Escriu amb xifres aquests nombres:



Nom:

Data:

1) Resol les sumes i restes.

$\begin{array}{r} 65 \\ + 22 \\ \hline \end{array}$	$\begin{array}{r} 45 \\ + 30 \\ \hline \end{array}$	$\begin{array}{r} 54 \\ - 24 \\ \hline \end{array}$	$\begin{array}{r} 45 \\ - 31 \\ \hline \end{array}$
---	---	---	---

$\begin{array}{r} 66 \\ + 21 \\ \hline \end{array}$	$\begin{array}{r} 40 \\ + 9 \\ \hline \end{array}$	$\begin{array}{r} 34 \\ - 32 \\ \hline \end{array}$	$\begin{array}{r} 45 \\ - 31 \\ \hline \end{array}$
---	--	---	---

$\begin{array}{r} 10 \\ + 78 \\ \hline \end{array}$	$\begin{array}{r} 4 \\ + 83 \\ \hline \end{array}$	$\begin{array}{r} 25 \\ - 3 \\ \hline \end{array}$	$\begin{array}{r} 68 \\ - 37 \\ \hline \end{array}$
---	--	--	---

2) Completa aquestes operacions.

▶ $1 + 4 = \dots\dots\dots$ ▶ $6 - 4 = \dots\dots\dots$ ▶ $5 + 4 = \dots\dots\dots$

▶ $4 + 0 = \dots\dots\dots$ ▶ $3 + 2 = \dots\dots\dots$ ▶ $7 - 4 = \dots\dots\dots$

▶ $6 - 1 = \dots\dots\dots$ ▶ $4 + 4 = \dots\dots\dots$ ▶ $9 - 2 = \dots\dots\dots$